


**3rd Math 5.1a**

Name: \_\_\_\_\_

Class: \_\_\_\_\_


Date: \_\_\_\_\_

1. Use the graph to answer the question.



Which month did Mr. Chips sell the most ice cream cakes?

- A. July
  - B. October
  - C. August
  - D. September
2. Each child in Mrs. Frazier's class owns no more than one pet. Mrs. Frazier's class counted the number of pets they own. The number of each is shown on the graph.




How many children own fish?

- A. 3 children
- B. 4 children
- C. 5 children
- D. 6 children

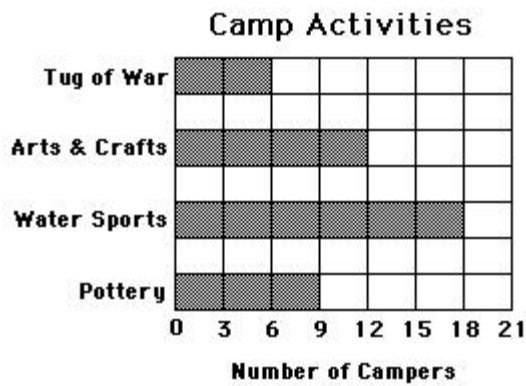
3. Use the graph to answer the question.

**Favorite Foods From Mr. Cookbook's Class**



How many children like tacos best?

- A. 3 children
  - B. 4 children
  - C. 5 children
  - D. 6 children
4. Use the following bar graph to answer the question.



Which activity has 18 campers in it?

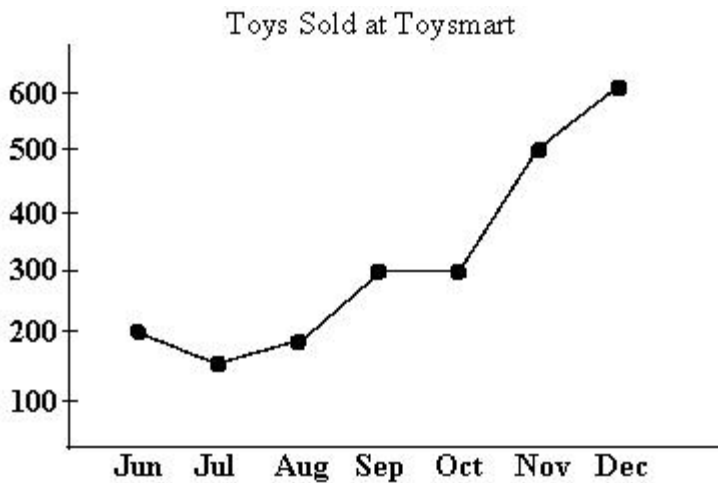
- A. Tug of War
- B. Arts & Crafts
- C. Water Sports
- D. Pottery

5. Use the line graph to answer the question.



In which months did Teesa earn the same amount of money?

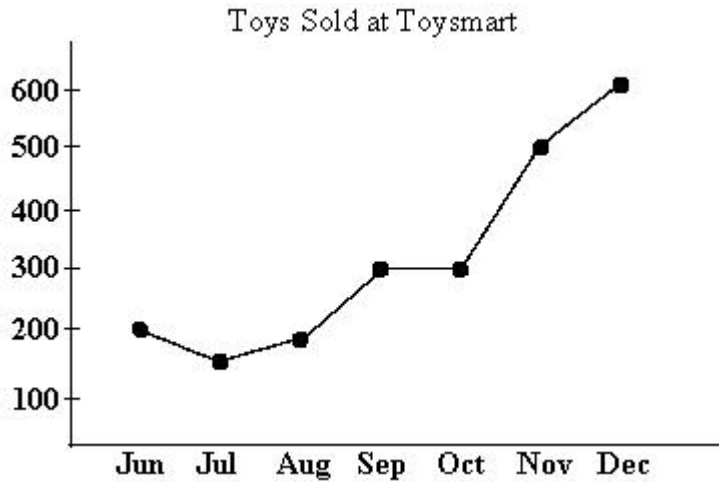
- A. July and September
  - B. May and July
  - C. June and August
  - D. April and June
6. Use the line graph to answer the question.



About how many toys were sold at Toysmart in August?

- A. 200 toys
- B. 300 toys
- C. 100 toys
- D. 400 toys

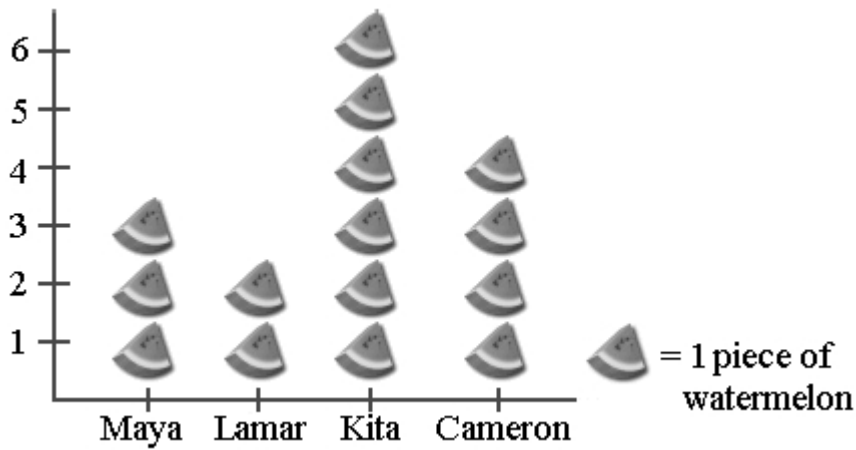
7. Use the line graph to answer the question.



How many more toys did Toysmart sell in November than June?

- A. 500 toys
- B. 200 toys
- C. 400 toys
- D. 300 toys

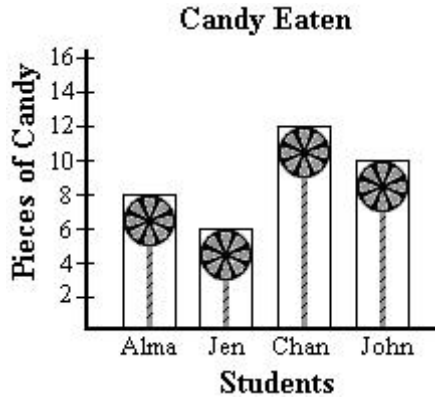
- 8.



How many more pieces of watermelon did Cameron eat than Lamar?

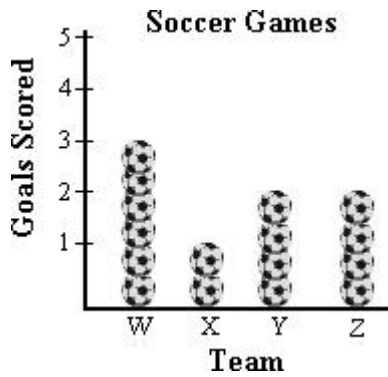
- A. 4 pieces
- B. 3 pieces
- C. 2 pieces
- D. 1 piece

9. Look at the graph and then answer the question.



Who ate more candy than Alma?

- A. Jen only
  - B. Chan and John
  - C. Chan only
  - D. John only
10. Look at the graph and then answer the question.



Which team scored 3 goals?

- A. Team W
- B. Team X
- C. Team Z
- D. Team Y